

# GRADE 4 - TEST

## Theme 1: Numbers

Full name: .....

School: .....

Class: .....

Mark

### Part 1

- 2 questions -

Look and read. Put a tick (✓) or a cross (✗) in the box.  
There are two examples.

#### Examples

$$\begin{array}{cccc} 2 & 0 & + & 9 \\ = & 2 & 9 & \end{array}$$

Twenty plus nine is  
twenty-nine.



This is a square.



#### Questions

①

$$\begin{array}{cccc} 6 & 0 & + & 5 \\ = & ? & & \end{array}$$

Sixty plus five is twenty-one.

☐

②




This is an oval.

☐

## Part 2

- 2 questions -

**Look and read. Write Yes or No.**



### Examples

I can see two stars.

Yes

I can see three circles.

No

### Questions

① I can see four ovals. \_\_\_\_\_

② I can see three rectangles. \_\_\_\_\_

## Part 3

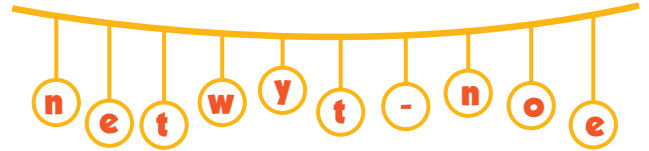
- 2 questions -

**Look at the pictures. Look at the letters. Write the words.**

### Example



twenty-one

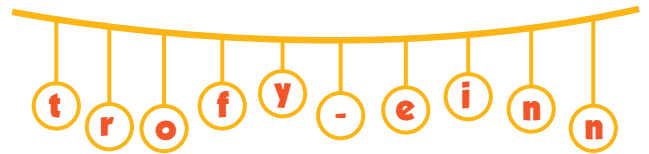


### Questions


①



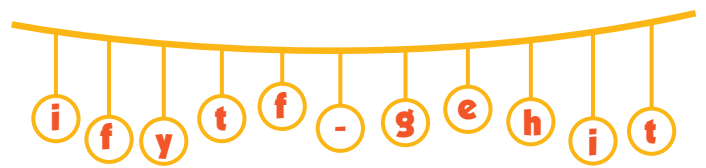
\_\_\_\_\_



②



\_\_\_\_\_



## Part 4

- 2 questions -

**Read this. Choose a word from the box. Write the correct word next to numbers 1-2. There is one example.**



Shapes are everywhere! Look, the window is a square, and the (1) \_\_\_\_\_ is a rectangle. The (2) \_\_\_\_\_ is a circle and the football is an oval.

Example



square



photo



basketball



football



## Part 5

- 2 questions -

**Look at the pictures and read the questions.  
Write one-word answers.**



### Examples

How many balloons are there?

There are four balloons.

What shape is the window?

It's a square.



### Questions

1. How old is Max?

He's \_\_\_\_\_ years old.

2. What shape is the cake?

It's a \_\_\_\_\_ .